

1st Grade

NTI 6

Student Name: _____

Teacher: _____

Please circle the school you attend:

Central

Garrison

Laurel

Tollesboro

Name: _____

Breakfast Surprise

By Guy Belleranti



Chipmunk woke up. She was hungry.

Chipmunk ran to the garden. Oh no! The carrots were gone. Rabbit ate them all for breakfast, she thought.

Chipmunk ran to the berry bushes. Oh no! The berries were gone, Bear ate them all for breakfast, she thought.

Chipmunk ran to the trees. Oh no! The nuts on the trees were gone. Bird ate them all for breakfast, she thought.


What could she eat for breakfast?

Suddenly she heard voices calling. "Over here, Chipmunk. By the river."

Chipmunk ran to the river. She saw four piles of carrots, berries and nuts.

"Surprise!" cried Rabbit, Bear and Bird. "We made breakfast for all of us."


"Thank you," Chipmunk said. "Let's eat!"



Name: _____

Breakfast Surprise

By Guy Belleranti



1. When does this story take place?

- a. before bedtime
- c. in the morning

- b. after dinner
- d. in the winter

2. Where does this story take place?

- a. in a city
- c. in the sea

- b. in a forest
- d. in a cold place

3. Use the words in the box to complete the sentences.

| | | |
|---------|------|---------|
| berries | nuts | carrots |
|---------|------|---------|

First, Chipmunk looked for _____.

Next, Chipmunk looked for _____.

Then Chipmunk looked for _____.

4. Chipmunk heard voices calling.


They said "**Over here, Chipmunk, by the river.**"

Whose voices did Chipmunk hear?

Name: _____

Breakfast Surprise

By Guy Belleranti



Draw lines to match the words from the story with their meanings.

1. carrots ●

● bunny; hare

2. berries ●

● fruits in a hard shell

3. nuts ●

● fruits that are small and juicy

4. hungry ●

● first meal of the day

5. breakfast ●

● long, orange vegetables

6. rabbit ●

● wanting to eat

1st Grade

NTI 7

Student Name: _____

Teacher: _____

Please circle the school you attend:

Central

Garrison

Laurel

Tollesboro

Name: _____

Dan Does Tricks

By S. V. Richard

Luke is a boy. Luke has a dog named Dan. Dan does tricks.

"Sit," says Luke.

Dan sits.

"Give me five," says Luke.

Dan gives Luke five with his paw.

"Smile," says Luke.

Dan smiles.

Luke sits by the pool. He does not jump in the pool.

"I do not want to get wet," says Luke.

Dan likes to swim. Luke throws a ball into the pool.

"Fetch," says Luke.

Dan jumps into the pool and gets the ball. Dan gets out of the pool and brings the ball to Luke.

"Good boy!" says Luke. "You are a smart dog, Dan."

Dan shakes the water off of his fur.

Now Luke is wet.

"Oh, Dan!"



Name: _____

Dan Does Tricks

By S. V. Richard



1. What is the first trick Dan does?

- a. He sits.
- b. He jumps in the pool.
- c. He gives Luke five.
- d. He rolls over.

2. Why won't Luke jump in the pool?

3. Put these sentences in order. Write 1, 2, and 3 on the lines.

_____ Dan jumps in the pool.

_____ Luke throws the ball in the pool.

_____ Dan shakes the water off of his fur.

4. How does Luke get wet?

- a. He jumps in the pool.
- b. Dan gets him wet.
- c. He drinks water.
- d. He gets the ball.

1st Grade

NTI 8

Student Name: _____

Teacher: _____

Please circle the school you attend:

Central

Garrison

Laurel

Tollesboro

Name: _____

Snow Fun

By Guy Belleranti

Zoe looked out the window.

"It's snowing!"

"Let's go out and play," Devin said.

"Yes," Grace said. "We can make a snowman."

They put on boots, coats, hats, and gloves. Then they ran outside.

"I think we should make a big snowman," Devin said.

"I think we should make a small one," Grace said.

"I have an idea we all might like," Zoe said. She told Devin and Grace her idea.

"Great idea," they said.

They did not make a big snowman or a small snowman.


They made three snow kids.

"They look like us," Devin said.

"You're right," Grace said. "I wonder what else we can make."

Zoe smiled. "I have an idea."

Seconds later, the friends were making...and throwing...snowballs!



Name: _____

Snow Fun

By Guy Belleranti

1. What time of year does the story most likely take place?

- a. summer
- b. fall
- c. winter
- d. spring



2. In the story, what do Grace and Devin disagree about?

3. What does Zoe suggest as an activity all three of them will like?

4. At the end of the story, what else do the kids make?

- a. a snow fort
- b. a snow man
- c. a sledding hill
- d. snowballs

Name: _____

Snow Fun

By Guy Belleranti



Draw lines to match the words from the story with their meanings.

1. coats

a. items you wear on your hands to keep them warm

2. wonder

b. made a happy face

3. gloves

c. outer clothing you wear when it's cold outside

4. snowman

d. items you wear on your feet to keep them warm and dry

5. boots

e. think about or guess at

6. smiled

f. a character made out of snow

Addition

INBT.4

Name: _____

Solve by drawing out each number or using a number line.

$$33 + 9 =$$

$$\begin{array}{r} 56 \\ + 5 \\ \hline \end{array}$$

$$\begin{array}{r} 38 \\ + 5 \\ \hline \end{array}$$

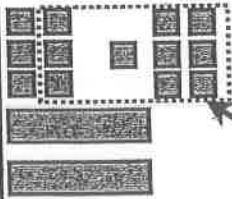
$$43 + 9 =$$

Addition

1.NBT.4

Name: _____

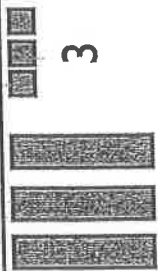
Examples: Draw



26

+ 7

Makes one
more 10



3

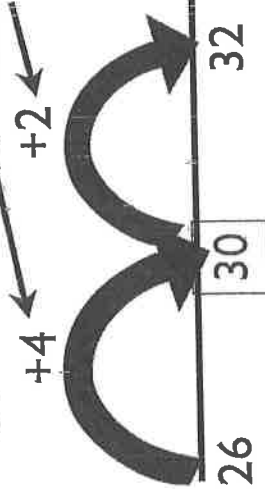
30

30 + 3 = 33

Number line or 100s chart

26 + 6 =

Break 6 apart to make next 10



26

30

32

18 + 6 =

13 + 8 =

12

+ 9

24

+ 8

NTI Day 8

Ms. Smith's class earned 11 stickers for great behavior. Mr. Jones' class earned 8 stickers. How many more stickers did Ms. Smith's class earn?

There are 9 students playing on the grass. Six more join them. How many are playing on the grass in all?

1st Grade

NTI 9

Student Name: _____

Teacher: _____

Please circle the school you attend:

Central

Garrison

Laurel

Tollesboro

Name: _____

Cody's Rock

by Faith Cormier

In the driveway, Cody found a black rock. It had yellow and red marks on it.

Cody touched the rock. A head poked out of one end. Two orange eyes peeked at Cody.



Cody ran to the house. "Mommy! Daddy! A rock looked at me!"

Mommy and Daddy came outside.

"That's not a rock," said Daddy. "It's a turtle."

"A turtle can't stay here. A car might hit it," said Mommy.

Mommy and Cody picked up the turtle. They carried it into the backyard. There were trees there.

"Now the turtle is safe," Cody said.

Name: _____

Cody's Rock

by Faith Cormier



1. Where did Cody find the rock?

2. What color were the rock's eyes?

a. black

b. yellow

c. red

d. orange

3. The rock was not really a rock. What was it?

4. Why did Mommy want to move it?

On the back, draw a picture that shows what Cody found.

Name: _____

Cody's Rock

by Faith Cormier



Draw lines to match the words from the story with their meanings.

1. turtle

a. away from harm

2. driveway

b. a yard behind a house

3. carried

c. lifted something

4. backyard

d. an animal with a shell on its back

5. safe

e. stuck out

6. poked

f. a place to park a car

Name _____

Date _____

Tens and Ones

Write the numbers in standard form.

$80 + 7 = \underline{\quad}$

$20 + 8 = \underline{\quad}$

$90 + 6 = \underline{\quad}$

$30 + 5 = \underline{\quad}$

$70 + 2 = \underline{\quad}$

$90 + 3 = \underline{\quad}$

$70 + 4 = \underline{\quad}$

$60 + 2 = \underline{\quad}$

$50 + 6 = \underline{\quad}$

$60 + 7 = \underline{\quad}$

$30 + 9 = \underline{\quad}$

$40 + 8 = \underline{\quad}$

$40 + 3 = \underline{\quad}$

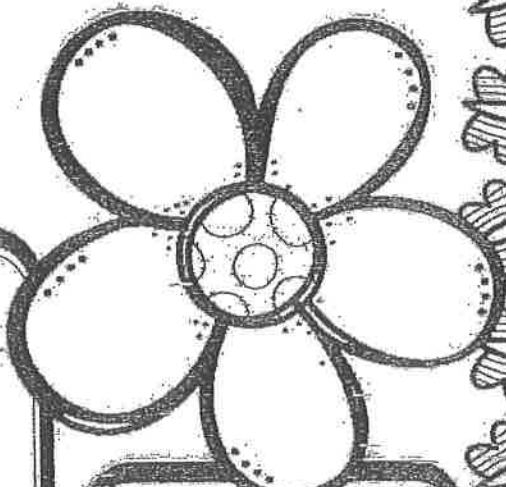

$80 + 8 = \underline{\quad}$

$60 + 9 = \underline{\quad}$

$50 + 3 = \underline{\quad}$

$60 + 4 = \underline{\quad}$


$30 + 2 = \underline{\quad}$

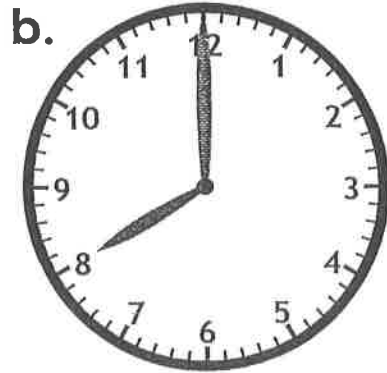


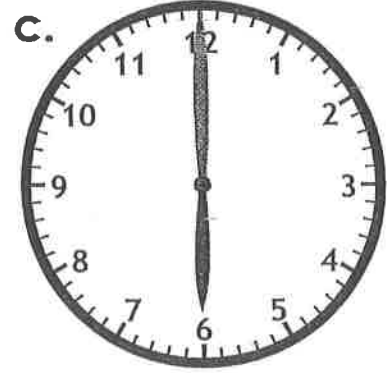
Name: _____


Telling Time


Write the time shown.














Name: _____

Fact Family Street

Use addition and subtraction to fill in the fact family living in each house.



a. 13
+, -
8 5

| | | | | |
|----|---|---|---|----|
| 8 | + | 5 | = | 13 |
| 5 | + | 8 | = | 13 |
| 13 | - | 8 | = | 5 |
| 13 | - | 5 | = | 8 |

b. 6
+, -
4 2

| | | | | |
|--|---|--|---|--|
| | + | | = | |
| | + | | = | |
| | - | | = | |
| | - | | = | |

c. 16
+, -
9 7

| | | | | |
|--|---|--|---|--|
| | + | | = | |
| | + | | = | |
| | - | | = | |
| | - | | = | |

d. 8
+, -
6 2

| | | | | |
|--|---|--|---|--|
| | + | | = | |
| | + | | = | |
| | - | | = | |
| | - | | = | |

e. 4
+, -
4 0

| | | | | |
|--|---|--|---|--|
| | + | | = | |
| | + | | = | |
| | - | | = | |
| | - | | = | |

f. 11
+, -
8 3

| | | | | |
|--|---|--|---|--|
| | + | | = | |
| | + | | = | |
| | - | | = | |
| | - | | = | |

g. 12
+, -
9 3

| | | | | |
|--|---|--|---|--|
| | + | | = | |
| | + | | = | |
| | - | | = | |
| | - | | = | |

h. 7
+, -
6 1

| | | | | |
|--|---|--|---|--|
| | + | | = | |
| | + | | = | |
| | - | | = | |
| | - | | = | |

i. 12
+, -
7 5

| | | | | |
|--|---|--|---|--|
| | + | | = | |
| | + | | = | |
| | - | | = | |
| | - | | = | |

1st Grade

NTI 10

Student Name: _____

Teacher: _____

Please circle the school you attend:

Central

Garrison

Laurel

Tollesboro

Name: _____

A Perfect Picnic

By Guy Belleranti

Mark and Ava decided to have a picnic in the back yard.

"I brought bread and cheese," Mark told his sister.

"I brought carrots," Ava said, "but I wish we had fruit."

"We do," said Mark. "We can pick berries off our bushes."

Ava smiled. "Okay. We better hurry. Those look like rain clouds."

They quickly began picking berries.

The wind started to blow.

They picked faster.

Suddenly, thunder boomed. Then, rain poured down!

Mark and Ava grabbed all the food and ran into the house.

"I am sorry your picnic was rained out," Mom said.

"Me, too," Mark said.

"It does not have to be rained out!" Ava said. "We can have a picnic in the house. You can join us, Mom."

"Great idea," Mark said. "It will be perfect. We have bread, cheese, carrots, and berries to eat and a roof to keep us dry!"



Name: _____

A Perfect Picnic

By Guy Belleranti



1. What is missing from Mark and Ava's picnic?
 - a. bread
 - b. cheese
 - c. carrots
 - d. fruit

2. Why do Mark and Ava come inside?
 - a. It is too hot.
 - b. It is too windy.
 - c. It starts to rain.
 - d. They do not have enough food.

3. What do Mark and Ava decide to do after they come inside?

4. Who joins Mark and Ava when they are back in the house?


5. How do Mark and Ava feel at the end of the story?

Name: _____

A Perfect Picnic

By Guy Belleranti

Draw lines to match the words from the story with their meanings.



1. picnic

2. hurry

3. berries

4. thunder

5. carrots

6. cheese

a. do something quickly; rush

b. a loud boom that comes after a flash of lightning

c. a food made from milk curds

d. orange root vegetables


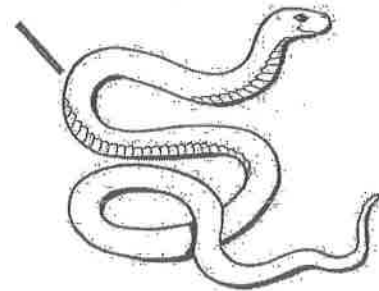



e. a meal you eat outside on a blanket

f. small, sweet fruits

Name: _____


Rhymes

Draw lines to match the rhyming words.



Name

Date



COUNT ON BY 2s SHEET 2

Count on by 2s to fill in the missing numbers.

1)

| | | | | | | | |
|---|---|--|--|---|--|--|----|
| 0 | 2 | | | 8 | | | 14 |
|---|---|--|--|---|--|--|----|

2)

| | | | | | | | |
|----|----|--|----|--|--|----|--|
| 10 | 12 | | 16 | | | 22 | |
|----|----|--|----|--|--|----|--|

3)

| | | | | | | | |
|----|--|----|----|--|--|--|----|
| 20 | | 24 | 26 | | | | 34 |
|----|--|----|----|--|--|--|----|

4)

| | | | | | | | |
|----|----|--|--|----|--|--|----|
| 14 | 16 | | | 22 | | | 28 |
|----|----|--|--|----|--|--|----|

5)

| | | | | | | | |
|----|----|--|----|--|--|----|--|
| 30 | 32 | | 36 | | | 42 | |
|----|----|--|----|--|--|----|--|

6)

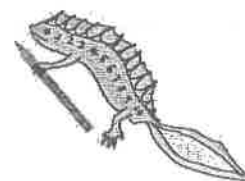
| | | | | | | | |
|---|--|--|----|--|--|--|----|
| 8 | | | 14 | | | | 22 |
|---|--|--|----|--|--|--|----|

7)

| | | | | | | | |
|----|--|--|----|--|--|--|----|
| 32 | | | 38 | | | | 46 |
|----|--|--|----|--|--|--|----|

8)

| | | | | | | | |
|----|--|--|--|----|--|--|--|
| 40 | | | | 48 | | | |
|----|--|--|--|----|--|--|--|



Free Math Sheets, Math Games and Math Help

MATH-SALAMANDERS.COM

Name: _____

MISSING ADDENDS

Find the missing addend to complete the problem



$$\square + 4 = 13$$

$$\square + 14 = 20$$

$$\square + 7 = 10$$

$$\square + 8 = 12$$

$$\square + 2 = 5$$

$$\square + 8 = 20$$

$$\square + 6 = 7$$

$$\square + 6 = 17$$

$$\square + 4 = 8$$

$$\square + 9 = 15$$

$$\square + 1 = 7$$

$$\square + 5 = 16$$

$$\square + 3 = 13$$

$$\square + 7 = 18$$

$$\square + 8 = 9$$

$$\square + 4 = 13$$